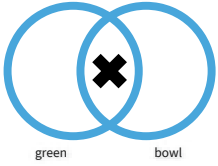

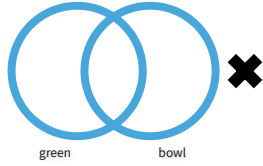
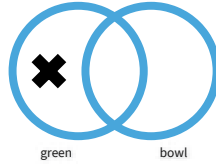




#1

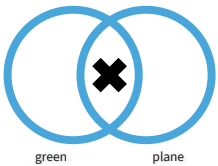
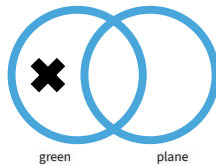
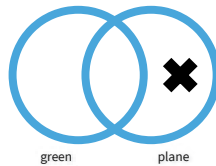
Which diagram represents this object?

☐☐☐

Show your work

#2

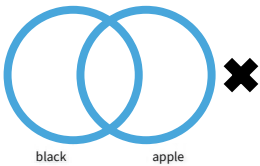
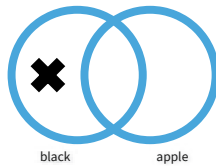
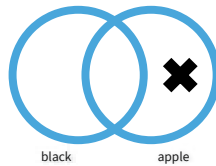
Which diagram represents this object?

☐☐☐

Show your work

#3

Which diagram represents this object?

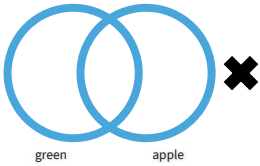
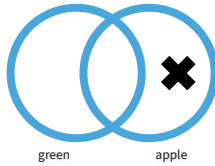
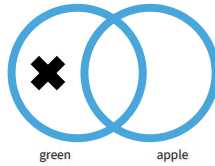
☐☐☐

Show your work



#4

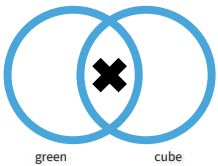

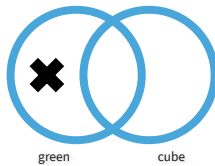
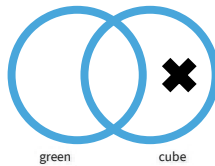
Which diagram represents this object?

☐☐☐

Show your work

#5

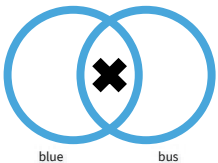
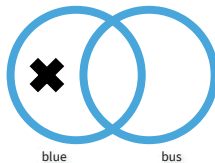
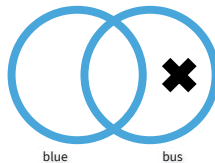
Which diagram represents this object?

☐☐☐

Show your work

#6

Which diagram represents this object?

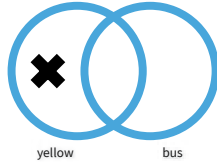
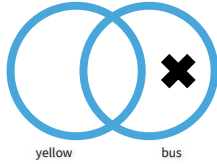
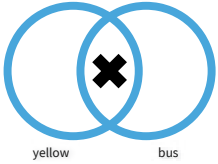
☐☐☐

Show your work



#7

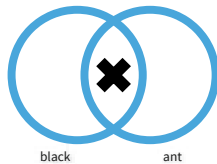
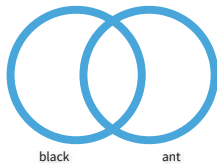
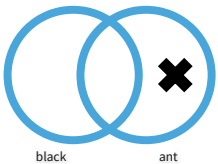
Which diagram represents this object?



Show your work

#8

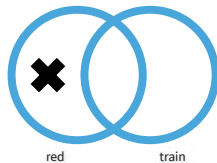
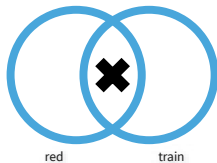
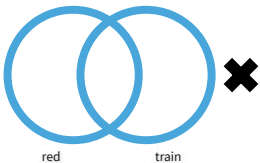
Which diagram represents this object?



Show your work

#9

Which diagram represents this object?

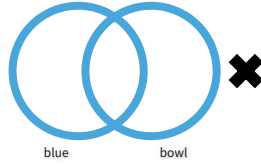
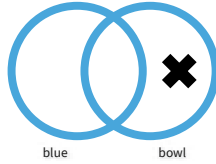
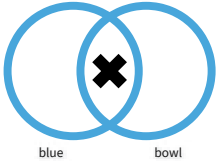


Show your work



#10

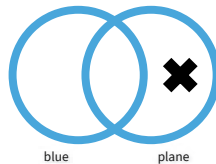
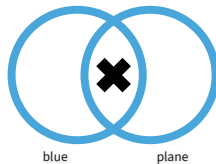
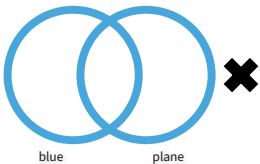
Which diagram represents this object?



Show your work

#11

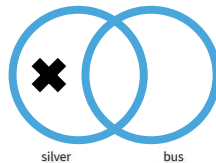
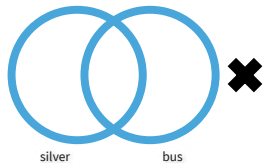
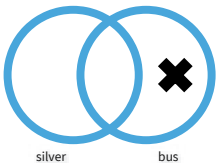
Which diagram represents this object?



Show your work

#12

Which diagram represents this object?



Show your work



Question	Answer
#1	choice 1
#2	choice 3
#3	choice 2
#4	choice 2
#5	choice 2
#6	choice 3
#7	choice 1
#8	choice 2
#9	choice 2
#10	choice 2
#11	choice 1
#12	choice 3