

#1

Count the ants.

☐ 90☐ 20☐ 70☐ 80

Show your work

#2

Count the batteries.

☐ 70☐ 40☐ 50☐ 90

Show your work

#3

Count the compact discs.

☐ 20☐ 10☐ 70☐ 40

Show your work

#4


Count the trains.

☐ 60☐ 20☐ 50☐ 10

Show your work

#5


Count the clovers.

☐ 100☐ 70☐ 10☐ 20

Show your work

#6

Count the grapes.

☐ 100☐ 20☐ 70☐ 50

Show your work

#7

Count the ants.

☐ 40☐ 60☐ 90☐ 70

Show your work

#8

Count the records.

☐ 40☐ 70☐ 60☐ 10

Show your work

#9


Count the tigers.

☐ 70☐ 100☐ 50☐ 90

Show your work

#10

Count the grapes.

☐ 40☐ 80☐ 50☐ 70

Show your work

#11

Count the flowers.

☐ 40☐ 10☐ 20☐ 100

Show your work

#12

Count the tigers.

☐ 40☐ 60☐ 90☐ 30

Show your work

Question	Answer
#1	choice 2
#2	choice 2
#3	choice 1
#4	choice 1
#5	choice 1
#6	choice 1
#7	choice 2
#8	choice 4
#9	choice 2
#10	choice 1
#11	choice 2
#12	choice 2