



#1


How many edges does this object have?

☐ 7☐ 8☐ 10☐ 6

Show your work

#2


How many edges does this object have?

☐ 11☐ 7☐ 8☐ 9

Show your work

#3

How many edges does this object have?


☐ 6☐ 10☐ 9☐ 8

Show your work



#4

How many edges does this object have?

☐ 12☐ 11☐ 15☐ 8

Show your work

#5


How many edges does this object have?

☐ 7☐ 5☐ 8☐ 6

Show your work

#6

How many edges does this object have?

☐ 14☐ 10☐ 16☐ 12

Show your work



#7

How many edges does this object have?

☐ 6☐ 8☐ 10☐ 7

Show your work

#8

How many edges does this object have?

☐ 11☐ 7☐ 9☐ 8

Show your work

#9

How many edges does this object have?

☐ 9☐ 6☐ 4☐ 7

Show your work



#10

How many edges does this object have?

☐ 5☐ 6☐ 8☐ 4

Show your work

#11

How many edges does this object have?

☐ 4☐ 6☐ 5☐ 7

Show your work

#12

How many edges does this object have?

☐ 12☐ 9☐ 13☐ 11

Show your work

Question	Answer
#1	8
#2	9
#3	8
#4	12
#5	6
#6	12
#7	8
#8	8
#9	6
#10	6
#11	6
#12	12