

#1

The clocks show three things Gabriel did Tuesday evening. Which did Gabriel do last?



math



science



history

- ☐ history      ☐ math      ☐ science


Show your work

#2

The clocks show three things Addison did Thursday evening. Which did Addison do last?



soccer



homework



eat

- ☐ homework      ☐ soccer      ☐ eat

Show your work

#3

The clocks show three things Joseph did Thursday evening. Which did Joseph do first?

6:05

homework

8:05

read

7:40

eat

- ☐ read      ☐ homework      ☐ eat

Show your work

#4

The clocks show three things Landon did Wednesday evening. Which did Landon do last?



play games



violin



walk dog

- ☐ play games      ☐ walk dog      ☐ violin


Show your work

#5

The clocks show three things Mason did Wednesday evening. Which did Mason do last?



play games



violin



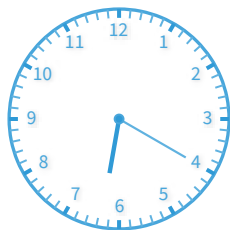
walk dog

- ☐ play games      ☐ violin      ☐ walk dog


Show your work

#6

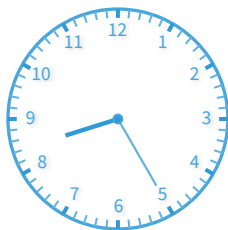
The clocks show three things Caden did Monday evening. Which did Caden do first?



phone call



fed fish



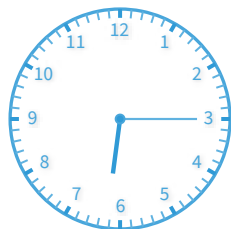
play

- ☐ play      ☐ phone call      ☐ fed fish

Show your work

#7

The clocks show three things Dylan did Thursday evening. Which did Dylan do first?



homework



read



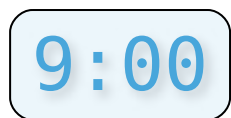
eat

- ☐ homework      ☐ eat      ☐ read

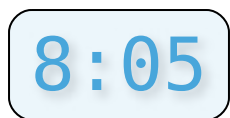
Show your work

#8

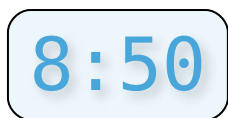
The clocks show three things Daniel did Monday evening. Which did Daniel do first?



phone  
call



fed fish



play

- ☐ fed fish      ☐ phone call      ☐ play

Show your work

#9

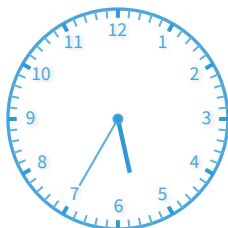
The clocks show three things Alyssa did Thursday evening. Which did Alyssa do last?



soccer



homework



eat

- ☐ homework      ☐ soccer      ☐ eat

Show your work

#10

The clocks show three things Landon did Thursday evening. Which did Landon do last?

6:55

soccer

6:30

homework

6:45

eat

☐

eat

☐

homework

☐

soccer

Show your work

#11

The clocks show three things Mason did Tuesday evening. Which did Mason do last?



math



science



history

☐

science

☐

math

☐

history

Show your work

#12

The clocks show three things Anna did Thursday evening. Which did Anna do last?

8:10

soccer

6:20

homework

5:35

eat

☐

eat

☐

soccer

☐

homework

Show your work

| Question | Answer   |
|----------|----------|
| #1       | choice 2 |
| #2       | choice 2 |
| #3       | choice 2 |
| #4       | choice 1 |
| #5       | choice 3 |
| #6       | choice 2 |
| #7       | choice 1 |
| #8       | choice 1 |
| #9       | choice 2 |
| #10      | choice 3 |
| #11      | choice 2 |
| #12      | choice 2 |