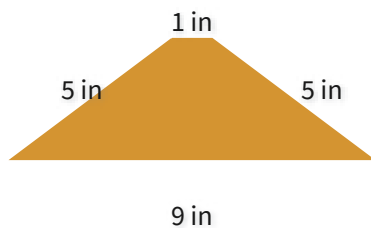
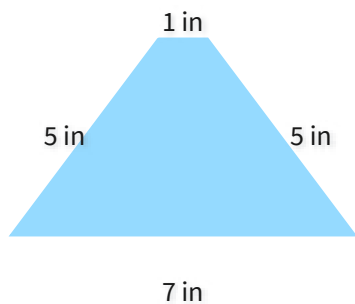


#1

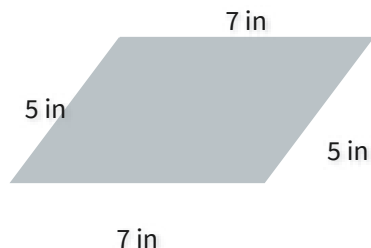
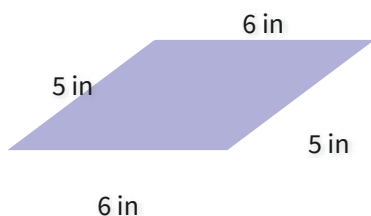
Which figure has a greater perimeter?



Show your work

#2

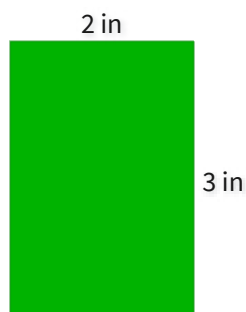
Which figure has a greater perimeter?



Show your work

#3

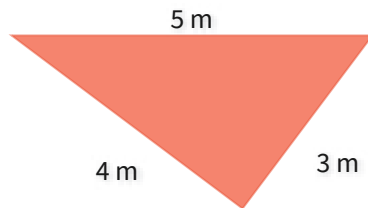
Which figure has a greater perimeter?



Show your work

#4


Which figure has a greater perimeter?



Show your work

#5

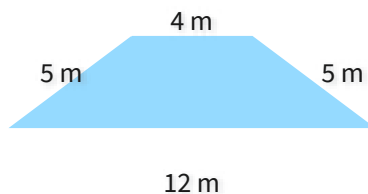
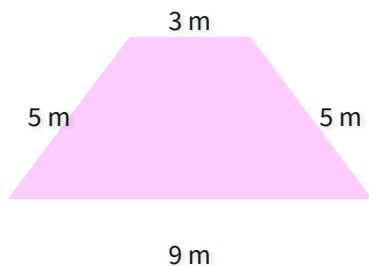
Which figure has a greater area?



Show your work

#6


Which figure has a greater perimeter?



Show your work

#7

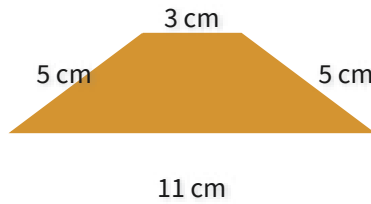
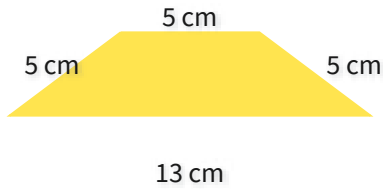
Which figure has a greater perimeter?



Show your work

#8



Which figure has a greater perimeter?



Show your work

#9


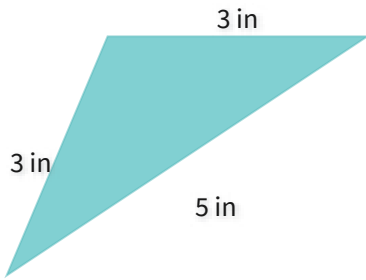
Which figure has a greater perimeter?



Show your work

#10

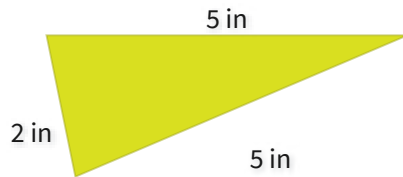
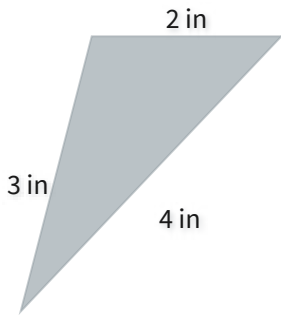
Which figure has a greater perimeter?



Show your work

#11

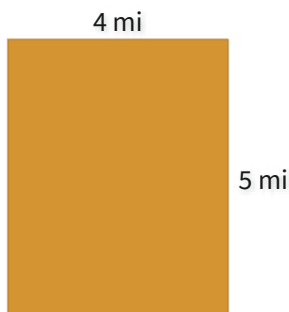
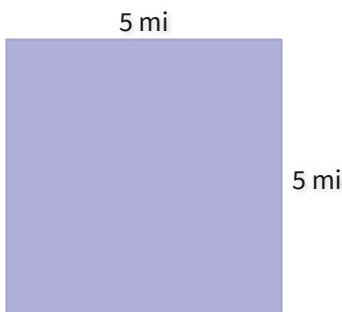
Which figure has a greater perimeter?



Show your work

#12

Which figure has a greater perimeter?



Show your work

Question	Answer
#1	choice 2
#2	choice 2
#3	choice 2
#4	choice 2
#5	choice 1
#6	choice 2
#7	choice 2
#8	choice 1
#9	choice 1
#10	choice 1
#11	choice 2
#12	choice 1