




#1


Look at the following pictograph. How many goals did Isabella score?

 goal(s)

Show your work

#2


Look at the following pictograph. How many action figures does Ashley own?

☐ 4☐ 5☐ 8☐ 7

Show your work

#3

Look at the following pictograph. It shows the number of penalty yards each football team has received. How many penalty yards did the Blue Bombers get?


 penalty yard(s)

Show your work



#4

Look at the following pictograph. It shows the number of penalty yards each football team has received. How many penalty yards did the Cougars get?




penalty yard(s)

Show your work

#5

Look at the following pictograph. It shows the number of penalty yards each football team has received. How many penalty yards did the Blue Bombers get?



☐ 7

☐ 6


☐ 8

☐ 5

Show your work

#6

Look at the following pictograph. It shows the number of rainy days per month in Seattle. How many days did it rain in February?




day(s)

Show your work



#7

Ants are crawling on Caleb. Look at the following pictograph. How many ants are on his Stomach?

 ant(s)

Show your work

#8


Look at the following pictograph. How many presents did Landon give for Christmas?

 present(s)

Show your work

#9

Look at the following pictograph. How many action figures does Elizabeth own?

☐ 3☐ 1☐ 0☐ 4

Show your work



#10

Look at the following pictograph. It shows the number of penalty yards each football team has received. How many penalty yards did the Blue Bombers get?

 penalty yard(s)

Show your work

#11


Look at the following pictograph. How many tigers did Connor see?

 tiger(s)

Show your work

#12

Look at the following pictograph. How many goals did Chloe score?

 goal(s)

Show your work

Question	Answer
#1	2
#2	7
#3	9
#4	9
#5	5
#6	10
#7	10
#8	6
#9	1
#10	9
#11	9
#12	5