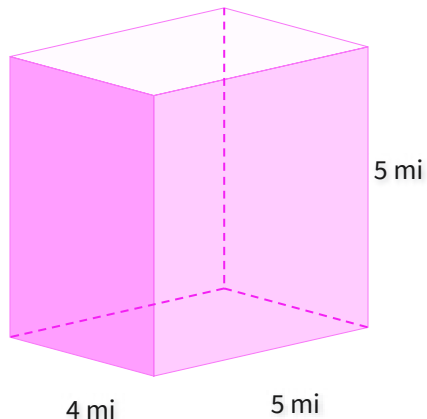


#1

What is the volume?

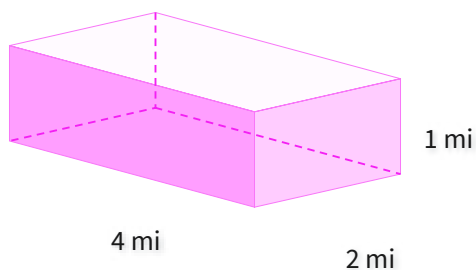


cubic mi

Show your work

#2

What is the volume?

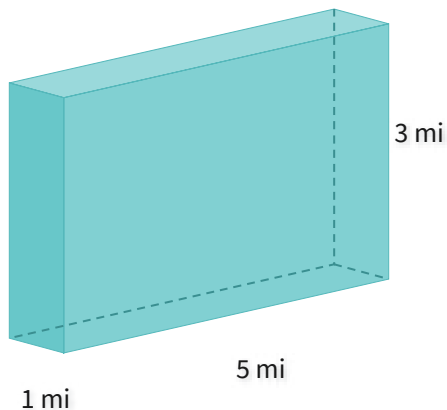


- ☐ 11 cubic mi ☐ 5 cubic mi
☐ 8 cubic mi ☐ 7 cubic mi

Show your work

#3

What is the volume?

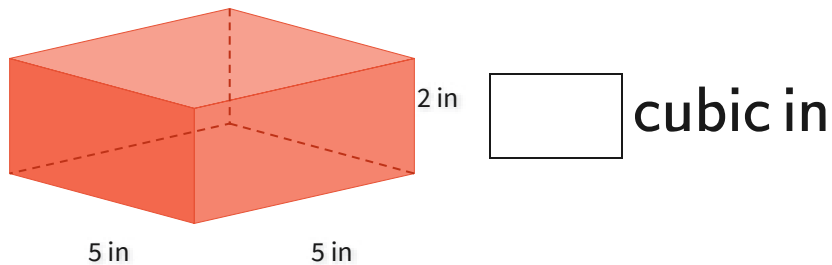


cubic mi

Show your work

#4

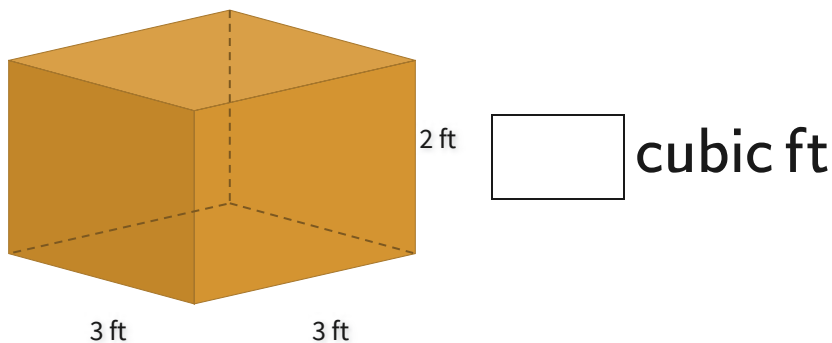
What is the volume?



Show your work

#5

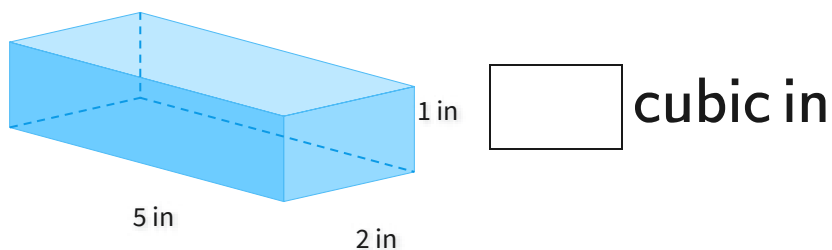
What is the volume?



Show your work

#6

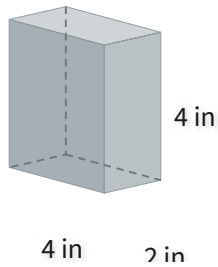
What is the volume?



Show your work

#7

What is the volume?

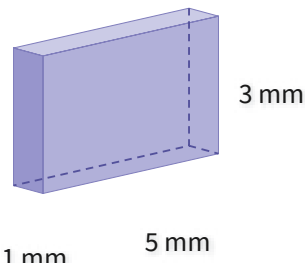


- ☐ 38 cubic in ☐ 32 cubic in
☐ 31 cubic in ☐ 34 cubic in

Show your work

#8

What is the volume?

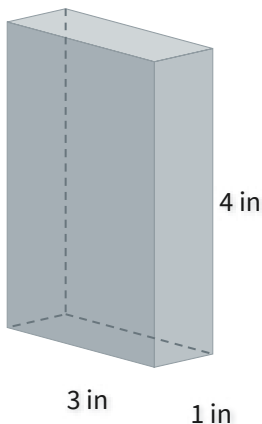


- ☐ 11 cubic mm ☐ 14 cubic mm
☐ 15 cubic mm ☐ 19 cubic mm

Show your work

#9

What is the volume?

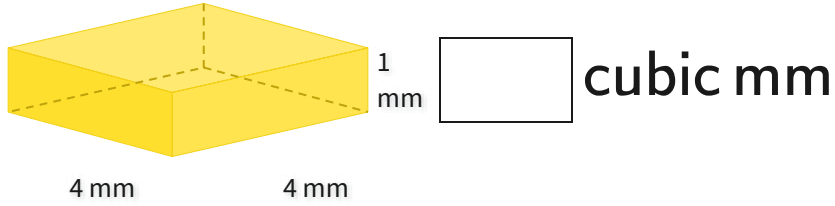


cubic in

Show your work

#10

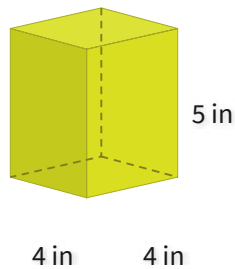
What is the volume?



Show your work

#11

What is the volume?

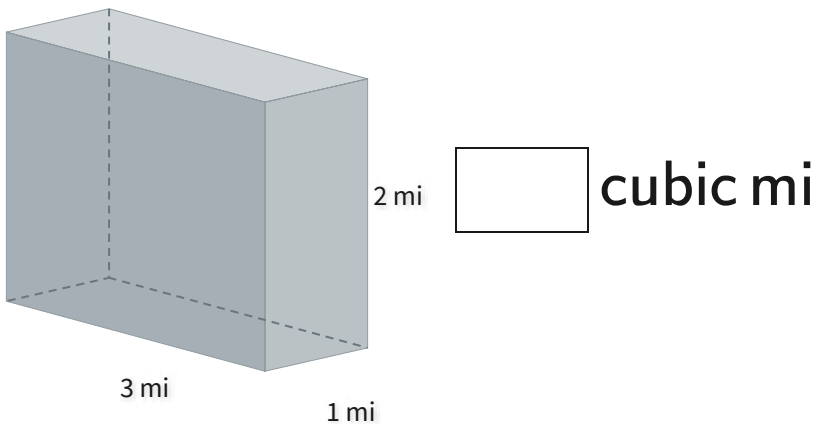


- ☐ 74 cubic in ☐ 91 cubic in
☐ 80 cubic in ☐ 95 cubic in

Show your work

#12

What is the volume?



Show your work

Question	Answer
#1	100
#2	choice 3
#3	15
#4	50
#5	18
#6	10
#7	choice 2
#8	choice 3
#9	12
#10	16
#11	choice 3
#12	6