

#1

While playing musical chairs, a chart was made for how many chairs several of the kids sat in before they were eliminated. Use the data below to complete the pictograph.

Chairs Sat In				
Name	Ava	Connor	Jack	Abigail
Chairs	0	8	5	7



Show your work

#2

At Cameron Elementary School students in the grade 2 class compare the number of action figures owned. Use the data below to complete the pictograph.

Action Figures owned				
Name	Hailey	Benjamin	Ryan	Ethan
Number	5	3	3	10




Show your work

#3

Matthew lives in the rainy city of Vancouver. He made a chart of the number of times he had to use an umbrella each month. Use the data below to complete the pictograph.

Umbrellas Used Each Month				
Month	January	Febuary	March	April
Umbrellas	3	2	0	8




Show your work



#4

The grade 4 class at Hannah Elementary School made a chart of the number of presents each of them gave for Christmas. Use the data below to complete the pictograph.

Presents Given				
Name	Anna	Ryan	Jacob	Connor
Number	2	10	1	8




Show your work

#5

Addison frequently flies for business. She made a chart of the number of flights made each month. Use the data below to complete the pictograph.

Flights Made				
Month	January	February	March	April
Flights	10	5	2	3



Show your work

#6

Aiden made a table of the number tigers he saw on safari. Use the data below to complete the pictograph.

Tigers Seen				
Day	Monday	Tuesday	Wednesday	Thursday
Tigers	3	0	0	9




Show your work

#7

Sydney is covered in ants. The table below shows where on her body the ants are located. Use the data below to complete the pictograph.

Ant Location				
Location	Arm	Stomach	Leg	Face
Number of Ants	10	6	2	10




Show your work

#8

Kaitlyn lives in the rainy city of Vancouver. She made a chart of the number of times she had to use an umbrella each month. Use the data below to complete the pictograph.

Umbrellas Used Each Month				
Month	January	February	March	April
Umbrellas	10	6	6	9




Show your work

#9

Natalie is a galactic explorer looking for habital planets and has arrived at a new solar system, Gliese 581. She wants to mark the number of moons around each planet in a graph. Use the data below to complete the pictograph.

Moons Around Planets				
Planet	Gliese 581 b	Gliese 581 c	Gliese 581 d	Gliese 581 e
Moon	9	3	5	6



Show your work

#10

At Diana Elementary School students in the grade 2 class compare the number of action figures owned. Use the data below to complete the pictograph.

Action Figures owned				
Name	Elizabeth	Dylan	Zachary	Mason
Number	9	9	1	3



Show your work

#11

At Zoe Elementary School students in the grade 2 class compare the number of action figures owned. Use the data below to complete the pictograph.

Action Figures owned				
Name	Madeline	Matilda	Caleb	Jackson
Number	0	3	9	7




Show your work

#12

Christopher is covered in ants. The table below shows where on his body the ants are located. Use the data below to complete the pictograph.

Ant Location				
Location	Arm	Stomach	Leg	Face
Number of Ants	10	7	6	1



Show your work

Question	Answer
#1	0, 8, 5, 7
#2	5, 3, 3, 10
#3	3, 2, 0, 8
#4	2, 10, 1, 8
#5	10, 5, 2, 3
#6	3, 0, 0, 9
#7	10, 6, 2, 10
#8	10, 6, 6, 9
#9	9, 3, 5, 6
#10	9, 9, 1, 3
#11	0, 3, 9, 7
#12	10, 7, 6, 1