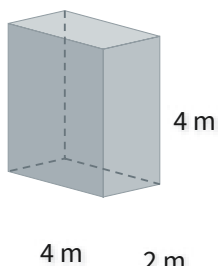




#1

What is the volume?

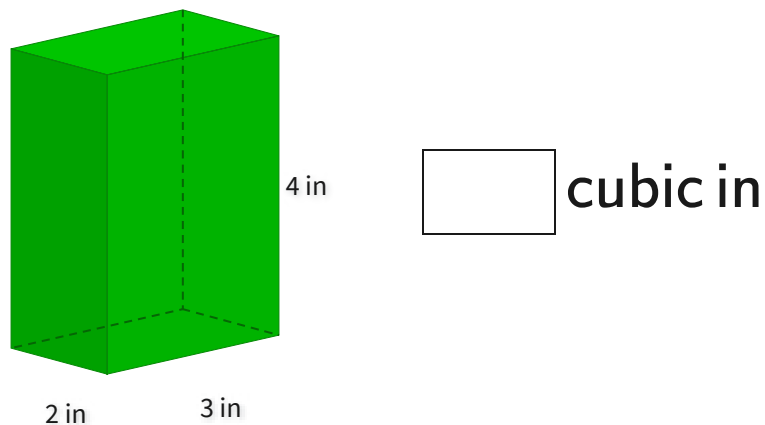


- ☐ 27 cubic m ☐ 31 cubic m
- ☐ 32 cubic m ☐ 35 cubic m

Show your work

#2

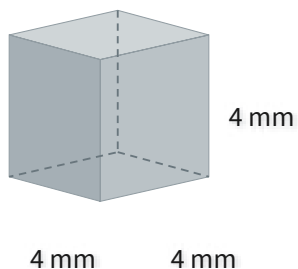
What is the volume?



Show your work

#3

What is the volume?



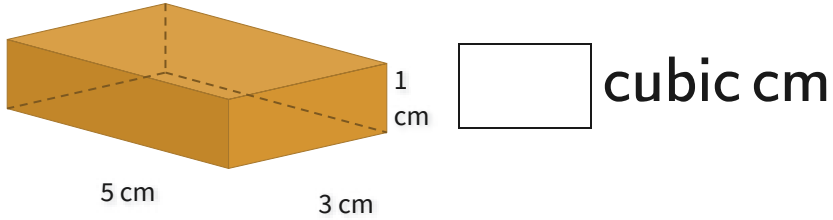
- ☐ 54 cubic mm ☐ 83 cubic mm
- ☐ 60 cubic mm ☐ 64 cubic mm

Show your work



#4

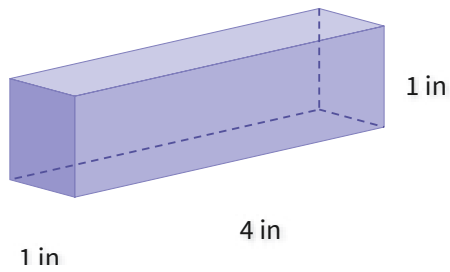
What is the volume?



Show your work

#5

What is the volume?

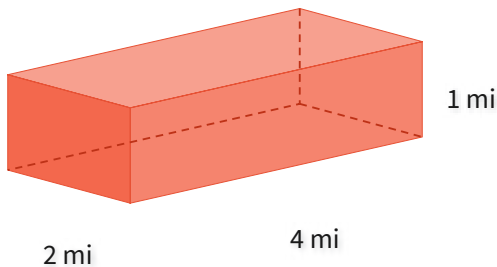


- ☐ 1 cubic in ☐ 4 cubic in
- ☐ 2 cubic in ☐ 3 cubic in

Show your work

#6

What is the volume?

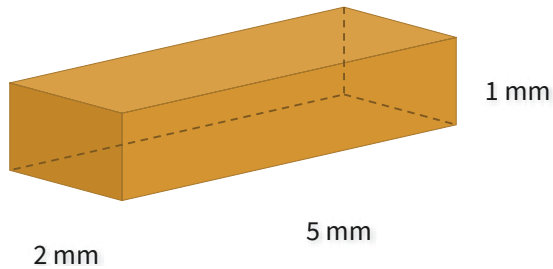


- ☐ 10 cubic mi ☐ 5 cubic mi
- ☐ 8 cubic mi ☐ 9 cubic mi

Show your work

#7

What is the volume?

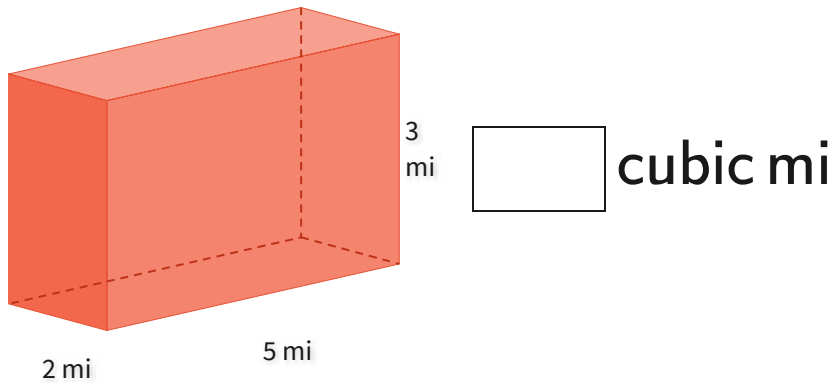


- ☐ 9 cubic mm
 ☐ 11 cubic mm
☐ 12 cubic mm
 ☐ 10 cubic mm

Show your work

#8

What is the volume?



cubic mi

Show your work

#9

What is the volume?

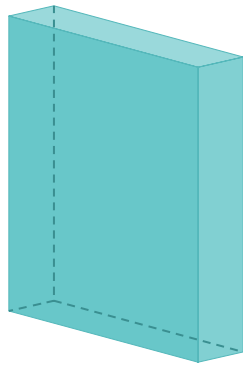


- ☐ 10 cubic m
 ☐ 13 cubic m
☐ 7 cubic m
 ☐ 9 cubic m

Show your work

#10

What is the volume?



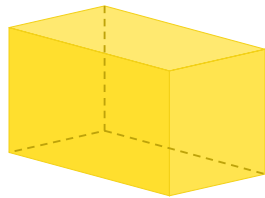
5 cm
1 cm

cubic cm

Show your work

#11

What is the volume?



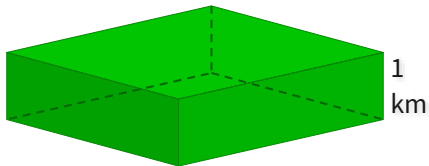
4 cm 2 cm

- ☐ 20 cubic cm ☐ 11 cubic cm
- ☐ 13 cubic cm ☐ 16 cubic cm

Show your work

#12

What is the volume?



4 km 4 km

cubic km

Show your work

Question	Answer
#1	choice 3
#2	24
#3	choice 4
#4	15
#5	choice 2
#6	choice 3
#7	choice 4
#8	30
#9	choice 1
#10	25
#11	choice 4
#12	16