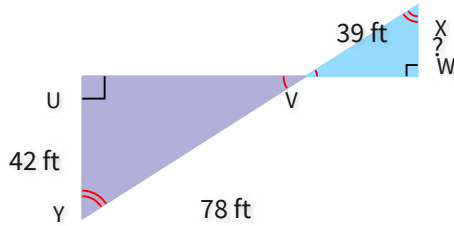


#1

What is the missing length?



☐ 26 ft

☐ 23 ft

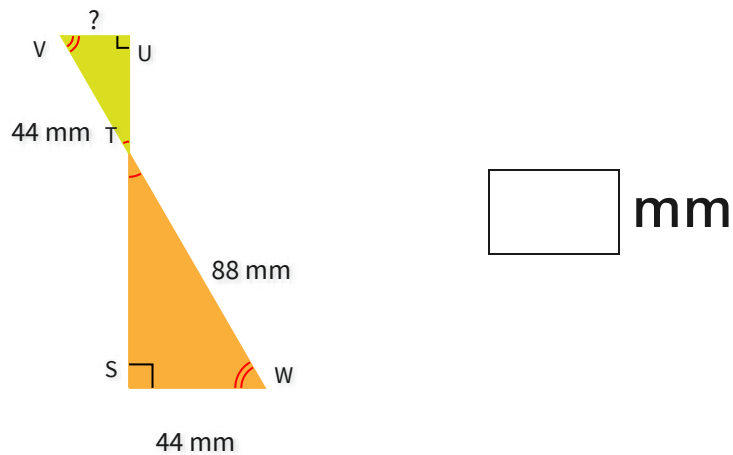
☐ 21 ft

☐ 19 ft

Show your work

#2

What is the missing length?

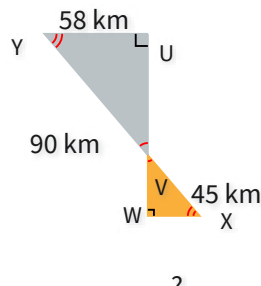


mm

Show your work

#3

What is the missing length?



☐ 27 km

☐ 20 km

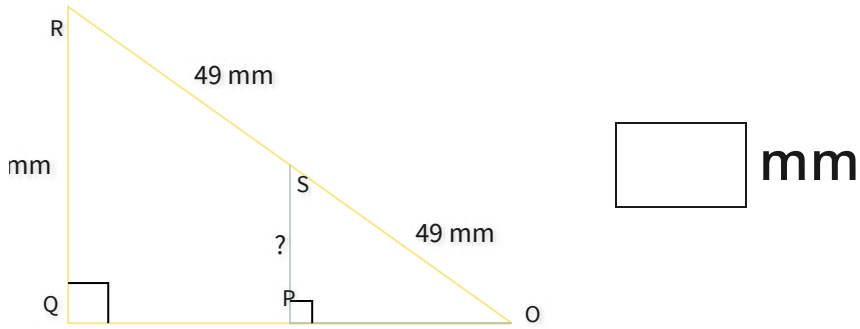
☐ 29 km

☐ 36 km

Show your work

#4

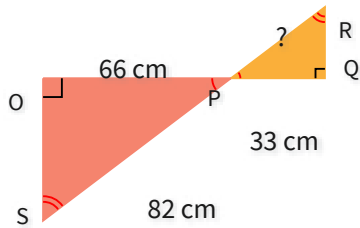
What is the missing length?



Show your work

#5

What is the missing length?

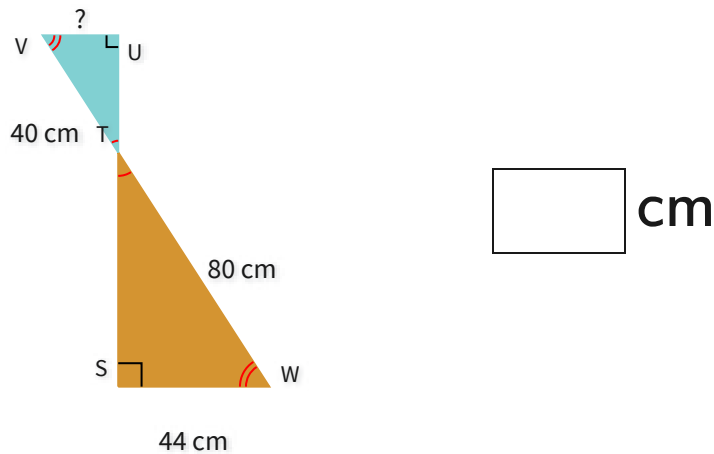


- ☐ 41 cm
- ☐ 37 cm
- ☐ 32 cm
- ☐ 36 cm

Show your work

#6

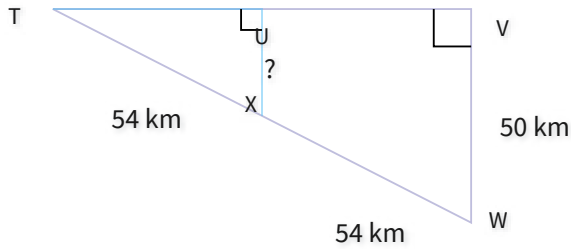
What is the missing length?



Show your work

#7

What is the missing length?

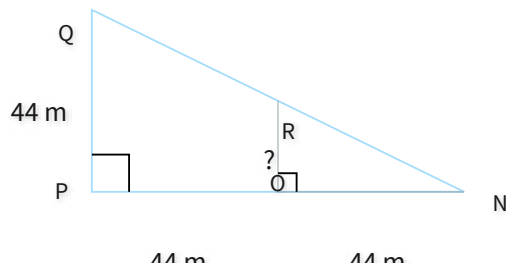


- ☐ 30 km
 ☐ 19 km
 ☐ 25 km
 ☐ 28 km

Show your work

#8

What is the missing length?

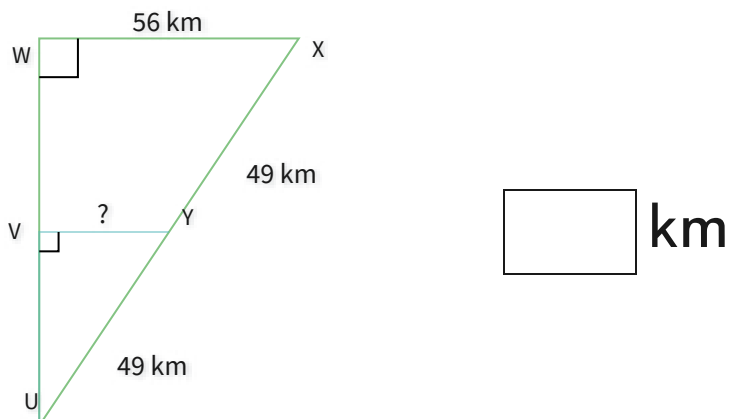


- ☐ 20 m
 ☐ 22 m
 ☐ 21 m
 ☐ 29 m

Show your work

#9

What is the missing length?



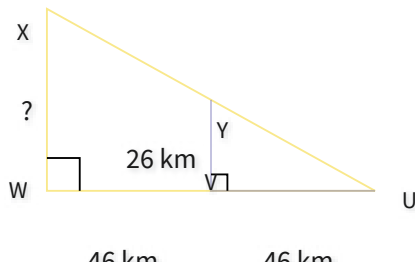
km

Show your work



#10

What is the missing length?

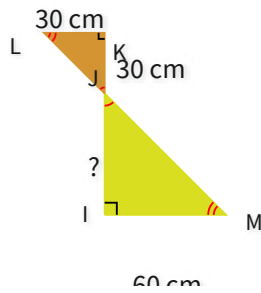


- ☐ 52 km ☐ 63 km
- ☐ 67 km ☐ 53 km

Show your work

#11

What is the missing length?

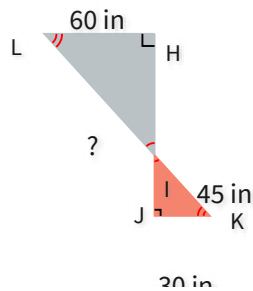


- ☐ 58 cm ☐ 47 cm
- ☐ 60 cm ☐ 61 cm

Show your work

#12

What is the missing length?



- ☐ 90 in ☐ 73 in
- ☐ 67 in ☐ 92 in

Show your work

Question	Answer
#1	choice 3
#2	22
#3	choice 3
#4	29
#5	choice 1
#6	22
#7	choice 3
#8	choice 2
#9	28
#10	choice 1
#11	choice 3
#12	choice 1