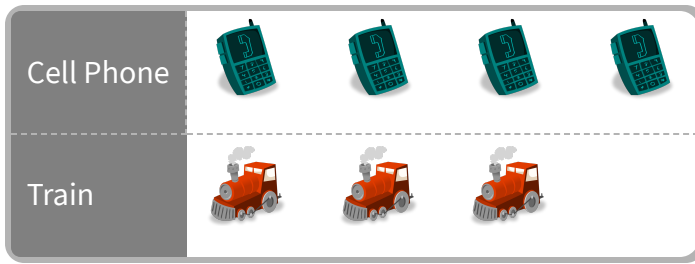


#1

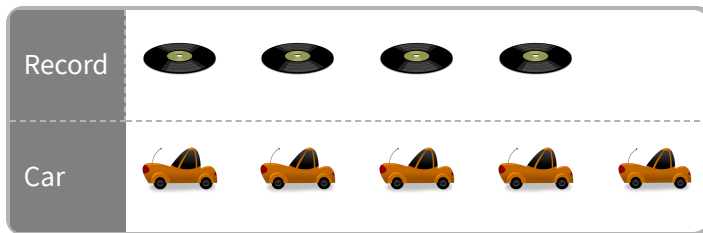
At the store, Gavin bought some cell phones and trains. He made a picture graph of the supplies he bought. Did Gavin buy more cell phones or trains?

☐ cell phones☐ trains

Show your work

#2


At the store, Matthew bought some records and cars. He made a picture graph of the supplies he bought. Did Matthew buy less records or cars?

☐ cars☐ records

Show your work

#3


At the store, Nick bought some trains and treasure chests. He made a picture graph of the supplies he bought. Did Nick buy less trains or treasure chests?

☐ treasure chests☐ trains

Show your work

#4

At the store, Kaylee bought some dolls and presents. She made a picture graph of the supplies she bought. Did Kaylee buy more dolls or presents?

☐

dolls


☐

presents

Show your work

#5

At the store, Diana bought some dolls and pitchers. She made a picture graph of the supplies she bought. Did Diana buy less dolls or pitchers?

☐

pitchers

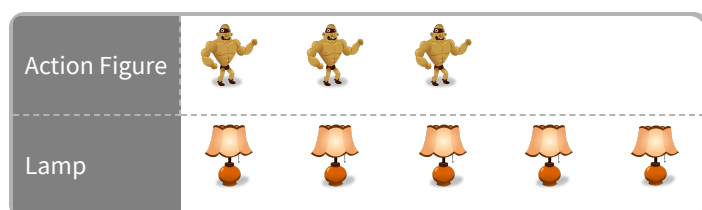
☐

dolls

Show your work

#6

At the store, William bought some action figures and lamps. He made a picture graph of the supplies he bought. Did William buy less action figures or lamps?

☐

action figures


☐

lamps

Show your work

#7

At the store, Mackenzie bought some apples and ladybugs. She made a picture graph of the supplies she bought. Did Mackenzie buy less apples or ladybugs?

☐ ladybugs☐ apples

Show your work

#8

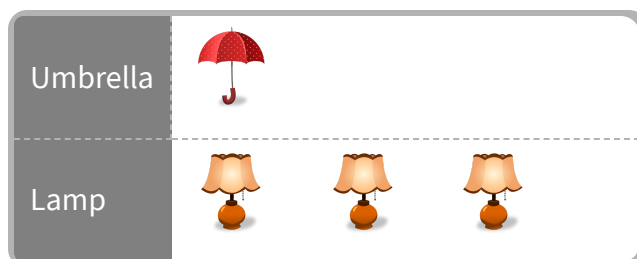
At the store, Mason bought some treasure chests and boxes. He made a picture graph of the supplies he bought. Did Mason buy less treasure chests or boxes?

☐ boxes☐ treasure chests

Show your work

#9

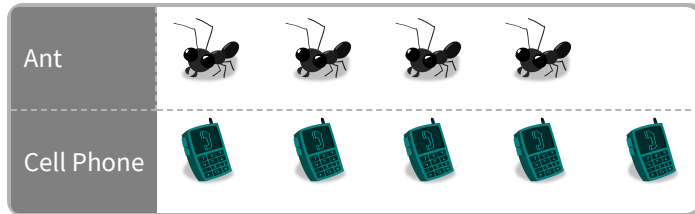
At the store, Addison bought some umbrellas and lamps. She made a picture graph of the supplies she bought. How many umbrellas did she buy?

 umbrellas

Show your work

#10

At the store, Kevin bought some ants and cell phones. He made a picture graph of the supplies he bought. Did Kevin buy more ants or cell phones?




☐ ants ☐ cell phones

Show your work

#11

At the store, Ella bought some dice and dolls. She made a picture graph of the supplies she bought. Did Ella buy less dice or dolls?

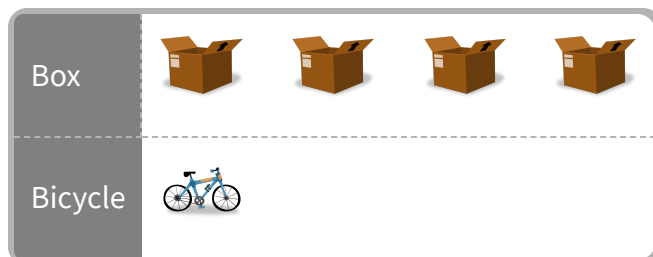


☐ dice ☐ dolls

Show your work

#12

At the store, Sarah bought some boxes and bicycles. She made a picture graph of the supplies she bought. How many bicycles did she buy?



bicycles

Show your work

Question	Answer
#1	choice 1
#2	choice 2
#3	choice 2
#4	choice 2
#5	choice 1
#6	choice 1
#7	choice 1
#8	choice 2
#9	1
#10	choice 2
#11	choice 2
#12	1